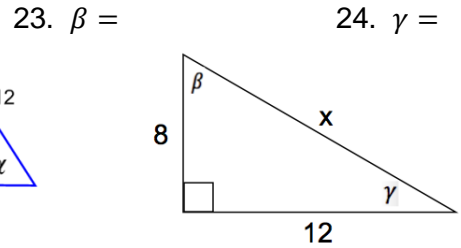
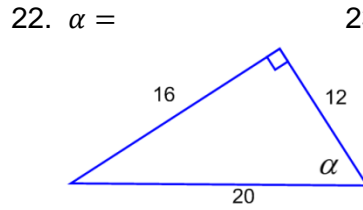
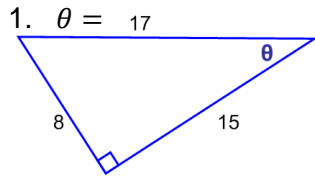


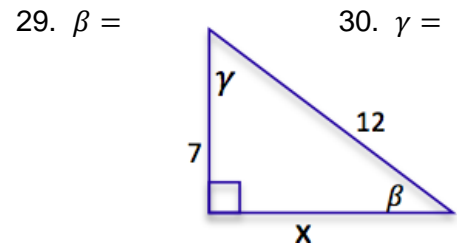
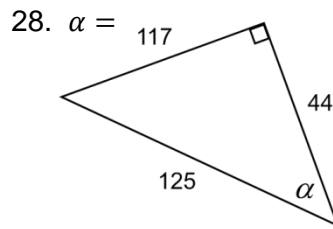
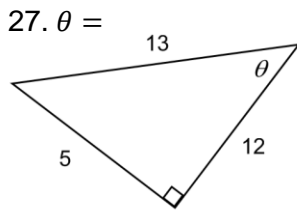
Inverse Trig Functions Homework



25. A right triangle has legs of 7 and 12. Find the smaller acute angle.

26. A right triangle has a longer leg of 5, and a hypotenuse of 13. Find the larger acute angle.

Inverse Trig Functions – Homework



31. A right triangle has legs of 6 and 10. Find the larger acute angle.

32. A right triangle has a longer leg of 1.2, and a hypotenuse of 2. Find the larger acute angle.